

4th Class work Week- Beginning 5th May 2020

Thank you all for your emails and pictures of the work you have been doing. Over the next few weeks I will start putting some of your powerpoints, art and projects up on the website. Ye are doing great, keep it up ☺

As Monday is a bank holiday, I have set a little less work this week. I have attached the answers to MYM for week 27 & 28 and Figure it out, please take a look and correct your work. ***Parents please don't feel the need to print these answers. The children can correct them off the computer.

Here is an **example** of a timetable to help you lay out your work this week.

	Monday	Tuesday	Wednesday	Thursday	Friday
Maths		MYM Tues FIO Written Computation	MYM Weds FIO Mental Problems	MYM Thurs IXL Practice	FIO Written Problems IXL Practice
English		Cloze Procedure	Cloze Procedure	WRITING: Diary Entry: A day at home during the Covid-19 Virus	Spelling practice
Gaeilge		L.Sa. Bh Pg. 62 Building sentences games	L.Sa. Bh Pg 63 Building sentences games	L.Sa. Bh Pg 64 Building sentences games	Building sentences games
Other 30-40 mins		SPHE/ Drama/ Music: TikTok Teampall Toinne Art/PE: Olympic Games			
	Library book	Library book	Library book	Library book	Library book
	GET ACTIVE	GET ACTIVE	GET ACTIVE	GET ACTIVE	GET ACTIVE

*FIO: Figure it out F & F: Fuaimeanna & Focail

bredakeating@ymail.com ***Parents please email me if you have any questions or would like more or less work for your child. This is an unfamiliar time for us all. I'd appreciate your feedback if it supports you & your child at home.***

English:

- **Cloze Procedure:** If we were at school, we would be preparing you for your summer assessments. This week I'd like you to take a break from the Golden Harp and practice two cloze procedures. We have practised these quite often at school so remember the rules- Read the whole text and the word bank TWICE before

putting pen to paper. You can change a word if you feel it works better somewhere else.

- **Creative writing:** *WRITING: Diary Entry: A day at home during the Covid-19 Virus. Remember to start with Dear Diary; write the date and write in the 1st person... 'Today **I** played... Yesterday **I**...'*
- **Spellings:** <https://www.spellingsforme.ie/> I can see that many of you have completed many tests. Please keep working through the tests and any words you spell incorrectly will be added to your 'Learning wall', which we will use to revise in the coming weeks.
- **Library book:** Continue spending time reading the books you love 😊 At least 20 minutes every day.

Maths:

- **Master Your Maths:** Complete Mon, Tues, Weds, Thurs of Week 29.
- **Figure It Out 4:**
Money: Pages 41, 42, 43. I have attached the work at the end of this document. To save on printing, you can copy the sums into your maths copy.
- **Tables & Mental Maths:** <https://ie.ixl.com/math/class-4>

4th class we are nearly at 5,000 answers. Great work, keep it up 😊

- This week please select **4th class** and revise **MONEY**.

Gaeilge:

- **Léigh sa bhaile:** Pgs 62, 63, 64. Remember to read the 'Foclóir' boxes and the passage twice before answering questions into your Homework copies.
- **Building sentences in Irish:** I have attached a document to help you practice writing sentences as Gaeilge. Follow the instructions on the 1st page. When you colour each group of words a different colour, it makes structuring these words easily. Here is an example to help you. Cut the cards out, put sentences together and write them into your Homework copy. Write at least 5 per day.

Tá _____ (ainmfhocail) _____ (aidiachtaí) _____ (briathra) _____ réamhfhocail.

m.sh. Tá buachaill mór ag snámh faoin bhfarraige.

If you are stuck on any word, look them up in your Foclóir dictionary or online at <https://www.teanglann.ie/ga/>

Other:

Stay Active: Get outside- spend time cycling, walking, skipping, playing games, exploring around your garden. If it's wet, use Go Noodle and 10 at 10 to stay active inside. <https://app.gonoodle.com/> and <https://rtejr.rte.ie/10at10/>

Get Creative:

ART/PE:



7 May - World Athletics Day This year World Athletics Day is observed on 7 May to raise awareness about sports among youth, in schools and institutions to promote athletics as the primary sport.

As you may know, the Olympics were to be held in Tokyo, Japan in July. Due to the Covid-19 outbreak, the Olympic Games Tokyo 2020 was postponed for the first time in their history. The Opening Ceremony of the Olympic Games Tokyo will now be held on the 23rd of July, 2021.

I would like you to do a piece of Art inspired by the Olympic Games. You can design your own Olympic logo or an Olympic mascot; Draw your favourite athlete; Draw the arena; Paint a picture based on an Olympic event; Draw & paint your own jersey & kit; Design your own medal; Make the Olympic torch.

For more information, take a look at the website: <https://www.olympic.org/tokyo-2020>



SPHE/DRAMA/MUSIC

TikTok Teampall Toinne: This week, I would like you to spend time working creatively. You will practice your team working, planning, performing, rehearsing and musical skills all in one. I want you to create an audition- it can be drama, role play, a song, a game, an activity, play an instrument. It can be whatever you like. You can do it alone or with your family/siblings. I would like you to come up with an idea, plan out with you will do, practice it, and rehearse it. Then when you feel it is ready, I'd like you to record it. Take your time planning as this is the most important part along with rehearsing but most importantly have fun 😊

Tuesday- Written Computation

Written Computation

1. $\begin{array}{r} \text{€}1.56 \\ \text{€}2.47 \\ + \text{€}3.62 \\ \hline \end{array}$	2. $\begin{array}{r} \text{€}3.63 \\ \text{€}1.29 \\ + \text{€}1.38 \\ \hline \end{array}$	3. $\begin{array}{r} \text{€}4.59 \\ \text{€}1.29 \\ + \text{€}2.67 \\ \hline \end{array}$	4. $\begin{array}{r} \text{€}2.86 \\ \text{€}3.19 \\ + \text{€}2.54 \\ \hline \end{array}$	5. $\begin{array}{r} \text{€}5.07 \\ \text{€}1.88 \\ + \text{€}2.69 \\ \hline \end{array}$
--	--	--	--	--









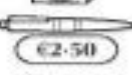

6. $\begin{array}{r} \text{€}26.38 \\ + \text{€}9.67 \\ \hline \end{array}$	7. $\begin{array}{r} \text{€}34.92 \\ + \text{€}18.65 \\ \hline \end{array}$	8. $\begin{array}{r} \text{€}58.39 \\ + \text{€}27.68 \\ \hline \end{array}$	9. $\begin{array}{r} \text{€}46.73 \\ + \text{€}25.98 \\ \hline \end{array}$	10. $\begin{array}{r} \text{€}37.64 \\ + \text{€}48.79 \\ \hline \end{array}$
---	--	--	--	---

11. $\begin{array}{r} \text{€}9.43 \\ - \text{€}4.67 \\ \hline \end{array}$	12. $\begin{array}{r} \text{€}8.36 \\ - \text{€}5.87 \\ \hline \end{array}$	13. $\begin{array}{r} \text{€}7.15 \\ - \text{€}4.89 \\ \hline \end{array}$	14. $\begin{array}{r} \text{€}9.06 \\ - \text{€}3.28 \\ \hline \end{array}$	15. $\begin{array}{r} \text{€}8.00 \\ - \text{€}2.47 \\ \hline \end{array}$
---	---	---	---	---

16. $\begin{array}{r} \text{€}38.46 \\ - \text{€}16.58 \\ \hline \end{array}$	17. $\begin{array}{r} \text{€}53.27 \\ - \text{€}29.53 \\ \hline \end{array}$	18. $\begin{array}{r} \text{€}74.35 \\ - \text{€}36.78 \\ \hline \end{array}$	19. $\begin{array}{r} \text{€}91.54 \\ - \text{€}48.96 \\ \hline \end{array}$	20. $\begin{array}{r} \text{€}95.03 \\ - \text{€}17.65 \\ \hline \end{array}$
---	---	---	---	---










Wednesday- Mental Problems

Mental Problems

-  Alex had €1.50. His dad gave him €2.10.
How much had Alex then? _____
-  Ann has four 50c coins and four 20c coins.
How much money has she altogether? _____
-  Sandra had €5. She bought a ball.
How much had she left? _____
- By how much is €6 greater than €3.20? _____
-  Terry has €4.80 and Tim has €2.50.
How much more money has Terry than Tim? _____
-  Julie has €5.50.
How much more does she need to buy the umbrella? _____
-  What change had Peter from €10 when he bought a cap? _____
-  Joe has €3.50. Joan has 60c more than that.
How much money have they between them? _____
- Paul bought a cake for €4.50 and buns for €2.00.
What change had he from €10? _____
-  How much for 2 litres of orange at €2.75 per litre? _____
-  Tina spent $\frac{1}{2}$ of her money buying a pen.
How much had she at first? _____
-  What change did Stephen get from €10.00 when he bought two sandwiches costing €3.25 each? _____

Thursday- Written Problems

Written Problems

1.  I spent €3.87 on fruit and €4.68 on vegetables.
How much did I spend altogether? _____
 2. Eric had €23.48 and Ellen had €35.79.
How much money had they between them? _____
 3.  I had €9.34. I spent €4.69 on biscuits.
How much had I left? _____
 4.  John had €20.00. He bought a tie for €12.65.
How much had he left? _____
 5.  Eva has €14.65, Eric has €23.78 and Elaine has €28.54.
How much money have they between them? _____
 6. By how much is the sum of €26.58 and €37.44 greater than €56.75? _____
 7.  Eoin had €50. He spent €17.68 in one shop and €25.70 in another.
How much had he left then? _____
 8. Take €30.69 from the sum of €9.65 and €27.48. _____
 9.  Fiona had €55.80. She got €26.50 from her mammy.
How much more does she need to buy the bicycle? _____
 10.  Mary has €23.65. Susan has €9.38 more than that.
How much money have they between them? _____
 11.  David had €62.87. His dad gave him €17.28.
How much more does he need to buy the mobile phone? _____
 12.  A helmet costs €26.85. This is €5.27 more than a hurley costs.
How much altogether for a helmet and a hurley? _____
-

The Sun

The Sun is a _____. It can be found at the _____ of our solar system. The sun is the biggest thing in our solar system and scientists estimate that it is about 4.5 _____ years old. The _____ between planet Earth and the Sun is about 150 million kilometres.



Our planet, Earth, is constantly moving around the Sun. It takes $365 \frac{1}{4}$ days for planet Earth to _____ one full circle around the Sun. This explains why there are 365 days in a year and why there is an extra day, every four years, in a leap year.

While Earth is moving around the Sun, it is also spinning on its own axis. It takes Earth 24 hours to complete one full spin. This gives us _____ and night. During the summer we have longer days and shorter nights, but during the winter we have shorter days and longer nights. The _____ day of the year, the winter solstice, is on 21st December. The longest day of the year, the summer _____, is on 21st June.

An _____ happens when the moon moves in between the Earth and the Sun. This causes the Sun's light to be blocked from reaching the earth for a short time.

The Sun is extremely important for life on Earth, without it, we would not have light, heat or food and we would not be able to _____. But we must also be cautious about the Sun because it can be _____ too. Our skin can burn if we spend too much time in the sunlight. The _____ rays from the sun can damage our eyes. We can _____ ourselves from the dangers of the sun by wearing suitable sunglasses and sun cream.

Word Bank

complete

survive

day

star

ultraviolet

eclipse

shortest

protect

distance

billion

solstice

dangerous

centre

Life Cycle of a Dandelion

Cloze Activity Sheet

The dandelion is a wild plant that is very recognisable because of its bright flowers. Many people consider the dandelion plant to be an unwanted weed in their gardens.

The season of _____ usually marks the return of the dandelion flower after the cold, winter months. The dandelion plant can produce flowers and seeds year after year. In fact, the older dandelions tend to have stronger roots than the younger dandelions.

But before this happens, every dandelion will _____ its life as a seed. Dandelion seeds are spread by the _____. The seed can be carried for miles by the wind before it settles into suitable soil. Once it finds a spot in some good soil, the seed will begin to germinate. This means that it will begin to _____ and become a young plant.

The shoots of the young plant will then be seen pushing up through the ground as it searches for _____. The plant will grow stronger as it gets nutrients from the soil. At this time, the buds and _____ of the plant will begin to grow.

Once they bloom, the bright _____ of the dandelion plant can be yellow or orange in colour. The flower of the dandelion opens in the morning and then when the night arrives, the flower closes in to go asleep.

Over time, the flower will _____ into a seed head. This can sometimes take up to 15 days to happen. The seed head is shaped like a puffy, _____ ball and can contain up to 100 seeds.

The seeds are then _____ off and spread by the wind. The seeds _____ like tiny parachutes and can end up in soil up to 5 miles away. These new seeds will become dandelion plants if they can find suitable soil to grow and the life cycle of the dandelion will start all over again.

Word Bank

wind

sunlight

flowers

leaves

spring

sprout

blown

travel

transform

white

begin
